

Examples of questions in Reading Paper



On Monday, we had a very good day. We went to the fair in the park. I won a huge, pink teddy.

On Wednesday, we went to the circus in a big tent. It was so lovely! We saw acrobats swinging high above our heads.

On Friday, JJ said, "Let's do something for Mum. She has been working all week."

"Can we do a picture in the garden?" I asked.

1 Draw three lines to show what Jasmine and JJ did on each day.

Monday

did something for Mum


Wednesday

went to the fair

Friday

went to the circus

2 What did Jasmine and JJ see at the circus?



When we finished, our painting was really bright and colourful. Then JJ said, "Hold these brushes very carefully. I will get something to clean them."

I wanted to see the top of our picture so I climbed the steps. They wobbled!

I dropped the brushes!

5 Why did Jasmine climb the steps?

6 Why did Jasmine drop the brushes?

Tick one.

The steps moved.

JJ told her to.

The brushes were dirty.

Mum was angry.

1 mark

1 mark

1 mark

1 mark

Examples of questions in Reading Paper

A cowboy's job

Two hundred years ago in North America, a huge area of grass covered most of the land. Because people wanted to eat meat, they kept cows on this land.

Cowboys were needed to move the cattle from one place to another. This could take months, so the cowboys lived and worked together and became friends.



A group of cowboys

14 What covered most of the land in North America two hundred years ago?

○ 1 mark

15 What job did the cowboys do?

○ 1 mark

16 Why did cowboys become friends with each other?

○ 1 mark

Examples of questions in Reading Paper

Questions 1–9 are about *Liam the Park Keeper* (pages 4–8)

1 Liam works...

(page 4)

Tick **one**.

outside all of the time.

at a desk when it is cold outside.

outside when it is sunny.

at a desk all of the time.

1 mark

2 Which area of the park does Liam keep particularly nice for visitors?

(page 4)

1 mark

3 Look at page 4.

(page 4)

Liam can find his work difficult.

Find and copy one word that tells you that Liam's work is difficult.

1 mark

4 Look at page 5.

(page 5)

Liam's daily tasks can change. What **two** things can make his tasks change?

Tick **two**.

the team

the trees

the visitors

the weather

the season

1 mark

Examples of questions in Reading Paper

Questions 10–18 are about *Dora the Storer* (pages 9–11)

(page 9)

10 Look at the beginning of the story.

What was different about Dora's things?

Tick **one**.

She bought them in the shop.

Someone gave them to her.

She made them herself.

They had been thrown away.

(page 9)

11 What sort of things did Dora choose to collect?

Tick **one**.

expensive things

colourful things

things that might be useful

things that she could sell

(page 9)

12 It was difficult to get the piece of paper through Dora's letter box.

Find and copy **one** word that tells you this.

1 mark

(pages 9–10)

13 Why did Dora want to give things to the jumble sale?

Write **two** reasons.

1. _____

2. _____

2 marks

(page 10)

14 Dora cried as she pushed her pram away for the last time. Why was she sad?

1 mark

Examples of Spelling, grammar and punctuation questions

Spelling

P. We always _____ the rabbits before school.

1. The display is on the _____.

2. Amar _____ his teddy a hug.

3. Matt ate a slice of _____.

4. Amy moved the _____.

5. My little _____ is four years old.

6. My friend has very long _____.

7. What is all the _____ about?

8. My cousin is saving up to _____ a scooter.

9. Please read that story _____.

10. The _____ came out at night.

11. There was a spare _____ on the bus.

12. The detective found a _____.

13. That was a _____ film!

14. We will _____ classrooms next year.

15. They went the _____ way.

16. Remember to _____ off the light.

17. Coins are made out of _____.

18. In maths, we learnt what a _____ is.

19. The audience _____ loudly.

20. Our teacher tells us the _____ stories.

End of spelling test

Examples of Spelling, grammar and punctuation questions

11 Which sentence needs one more **capital letter**?

Tick **one**.

They moved house last March.

They live in a city called Chester.

Their friend is called ben Edwards.

Their school play is on Tuesday.

15 Add a suffix to the word **light** in the sentence below to make an **adverb**.

It was raining light_____ at playtime today.

12 Circle the **noun** in the sentence below.

The talented dancer moved gracefully.

16 Use only the words in the box below to write a **statement**.

flower	the	grow	will
--------	-----	------	------

Remember to use correct punctuation.

Examples of Maths questions arithmetic and reasoning questions

3

$18 - 6 =$

1 mark

7

$5 \times 6 =$

1 mark

4

$10 \times 10 =$

1 mark

8

$98 + 4 =$

1 mark

Examples of Maths questions arithmetic and reasoning questions

20

$\frac{1}{4}$ of 8 =

1 mark

23

$\frac{2}{4}$ of 36 =

1 mark

21

$\frac{1}{2}$ of 90 =

1 mark

24

$62 - 54 =$

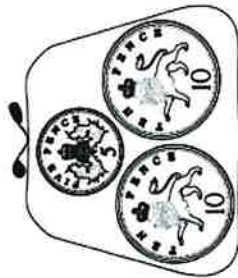
1 mark

Examples of Maths questions arithmetic and reasoning questions

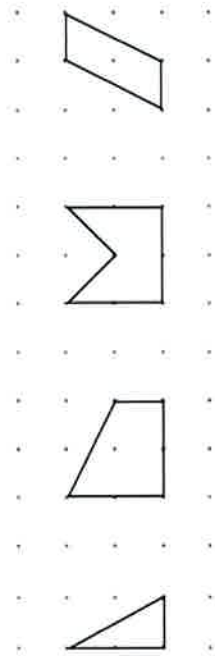
15 Amy has 50p.

She buys a pencil for 30p.

Tick the purse that shows how much money Amy has left.



18 Tick the shape that has a line of symmetry.



19 Write the next number sentence in the pattern.

$$1 + 2 + 3 = 6$$

$$2 + 3 + 4 = 9$$

$$3 + 4 + 5 = 12$$

$$4 + 5 + 6 = 15$$

$$\square + \square + \square = \square$$

Examples of Maths questions arithmetic and reasoning questions

29 There are **100g** of chocolate chips in the bag.



Sita uses **25g**.

Ben uses **35g**.

How many grams of chocolate chips are **left** in the bag?

Show your working

9

30 A shop has 12 bags of crisps.



It sells $\frac{1}{4}$ of the bags.

How many bags of crisps did the shop **sell**?

bags

31 Ben has **63** beads.

He gives **37** beads away.

How many beads does Ben have **left**?

beads